

No part of this product may be reproduced in any form or by any electronic or mechanical means, including information storage and retrieval systems, without written permission from the IB.

Additionally, the license tied with this product prohibits commercial use of any selected files or extracts from this product. Use by third parties, including but not limited to publishers, private teachers, tutoring or study services, preparatory schools, vendors operating curriculum mapping services or teacher resource digital platforms and app developers, is not permitted and is subject to the IB's prior written consent via a license. More information on how to request a license can be obtained from <https://ibo.org/become-an-ib-school/ib-publishing/licensing/applying-for-a-license/>.

Aucune partie de ce produit ne peut être reproduite sous quelque forme ni par quelque moyen que ce soit, électronique ou mécanique, y compris des systèmes de stockage et de récupération d'informations, sans l'autorisation écrite de l'IB.

De plus, la licence associée à ce produit interdit toute utilisation commerciale de tout fichier ou extrait sélectionné dans ce produit. L'utilisation par des tiers, y compris, sans toutefois s'y limiter, des éditeurs, des professeurs particuliers, des services de tutorat ou d'aide aux études, des établissements de préparation à l'enseignement supérieur, des fournisseurs de services de planification des programmes d'études, des gestionnaires de plateformes pédagogiques en ligne, et des développeurs d'applications, n'est pas autorisée et est soumise au consentement écrit préalable de l'IB par l'intermédiaire d'une licence. Pour plus d'informations sur la procédure à suivre pour demander une licence, rendez-vous à l'adresse suivante : <https://ibo.org/become-an-ib-school/ib-publishing/licensing/applying-for-a-license/>.

No se podrá reproducir ninguna parte de este producto de ninguna forma ni por ningún medio electrónico o mecánico, incluidos los sistemas de almacenamiento y recuperación de información, sin que medie la autorización escrita del IB.

Además, la licencia vinculada a este producto prohíbe el uso con fines comerciales de todo archivo o fragmento seleccionado de este producto. El uso por parte de terceros —lo que incluye, a título enunciativo, editoriales, profesores particulares, servicios de apoyo académico o ayuda para el estudio, colegios preparatorios, desarrolladores de aplicaciones y entidades que presten servicios de planificación curricular u ofrezcan recursos para docentes mediante plataformas digitales— no está permitido y estará sujeto al otorgamiento previo de una licencia escrita por parte del IB. En este enlace encontrará más información sobre cómo solicitar una licencia: <https://ibo.org/become-an-ib-school/ib-publishing/licensing/applying-for-a-license/>.

Chemistry
Standard level
Paper 1

Thursday 5 November 2020 (afternoon)

45 minutes

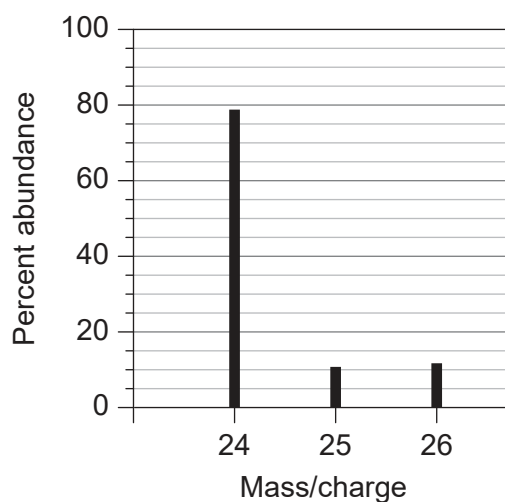
Instructions to candidates

- Do not open this examination paper until instructed to do so.
- Answer all the questions.
- For each question, choose the answer you consider to be the best and indicate your choice on the answer sheet provided.
- The periodic table is provided for reference on page 2 of this examination paper.
- The maximum mark for this examination paper is **[30 marks]**.

1. What is the molar mass, in g mol^{-1} , of a compound if 0.200 mol of the compound has a mass of 13.2 g?
- A. 66.0
B. 66
C. 26.4
D. 26
2. What is the number of carbon atoms in 12 g of ethanoic acid CH_3COOH , $M_r = 60$?
- A. 0.20
B. 2.0
C. 1.2×10^{23}
D. 2.4×10^{23}
3. Which of these molecular formulae are also empirical formulae?
- I. $\text{C}_2\text{H}_6\text{O}$
II. $\text{C}_2\text{H}_4\text{O}_2$
III. C_5H_{12}
- A. I and II only
B. I and III only
C. II and III only
D. I, II and III
4. Which volume of ethane gas, in cm^3 , will produce 40 cm^3 of carbon dioxide gas when mixed with 140 cm^3 of oxygen gas, assuming the reaction goes to completion?
- $$2\text{C}_2\text{H}_6(\text{g}) + 7\text{O}_2(\text{g}) \rightarrow 4\text{CO}_2(\text{g}) + 6\text{H}_2\text{O}(\text{g})$$
- A. 10
B. 20
C. 40
D. 80

Turn over

5. What is the relative atomic mass, A_r , of an element with this mass spectrum?



- A. 24.0
B. 24.3
C. 24.9
D. 25.0
6. What is the maximum number of electrons that can occupy the 4th main energy level in an atom?
- A. 8
B. 14
C. 18
D. 32
7. Which of the following shows a general increase across period 3 from Na to Cl?
- A. Ionic radius
B. Atomic radius
C. Ionization energy
D. Melting point

8. Which oxide will dissolve in water to give the solution with the lowest pH?

- A. P_4O_{10}
- B. SiO_2
- C. Al_2O_3
- D. MgO

9. Which formula is correct?

- A. NH_4PO_4
- B. $(NH_4)_2PO_4$
- C. $(NH_4)_3PO_4$
- D. $(NH_4)_3(PO_4)_2$

10. Which molecule is most polar?

- A. CHF_3
- B. CF_4
- C. $CClF_3$
- D. CCl_4

11. Which combination correctly describes the geometry of the carbonate ion, CO_3^{2-} ?

| | Electron domain geometry around C | Molecular geometry around C |
|----|--|------------------------------------|
| A. | Trigonal planar | Trigonal pyramidal |
| B. | Tetrahedral | Trigonal planar |
| C. | Trigonal planar | Trigonal planar |
| D. | Tetrahedral | Trigonal pyramidal |

Turn over

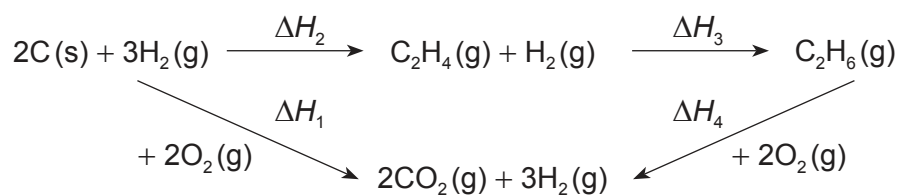
12. Which series shows the correct order of metallic bond strength from strongest to weakest?

- A. Na > K > Rb > Mg
- B. Mg > Rb > K > Na
- C. Rb > K > Na > Mg
- D. Mg > Na > K > Rb

13. Which equation shows the enthalpy of formation, ΔH_f° , of ethanol?

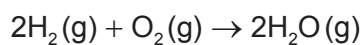
- A. $2\text{C(s)} + 3\text{H}_2\text{(g)} + \frac{1}{2}\text{O}_2\text{(g)} \rightarrow \text{C}_2\text{H}_5\text{OH(g)}$
- B. $4\text{C(s)} + 6\text{H}_2\text{(g)} + \text{O}_2\text{(g)} \rightarrow 2\text{C}_2\text{H}_5\text{OH(g)}$
- C. $2\text{C(s)} + 3\text{H}_2\text{(g)} + \frac{1}{2}\text{O}_2\text{(g)} \rightarrow \text{C}_2\text{H}_5\text{OH(l)}$
- D. $4\text{C(s)} + 6\text{H}_2\text{(g)} + \text{O}_2\text{(g)} \rightarrow 2\text{C}_2\text{H}_5\text{OH(l)}$

14. Which combination will give you the enthalpy change for the hydrogenation of ethene to ethane, ΔH_3 ?



- A. $-\Delta H_2 + \Delta H_1 - \Delta H_4$
- B. $\Delta H_2 - \Delta H_1 + \Delta H_4$
- C. $\Delta H_2 + \Delta H_1 - \Delta H_4$
- D. $-\Delta H_2 - \Delta H_1 + \Delta H_4$

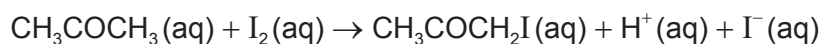
15. What is the H-H bond enthalpy, in kJ mol^{-1} , in the H_2 molecule?



$$\Delta H_f(\text{H}_2\text{O}) = x \text{ kJ mol}^{-1}$$

| Bond | Bond enthalpy / kJ mol^{-1} |
|------|--------------------------------------|
| O=O | y |
| O-H | z |

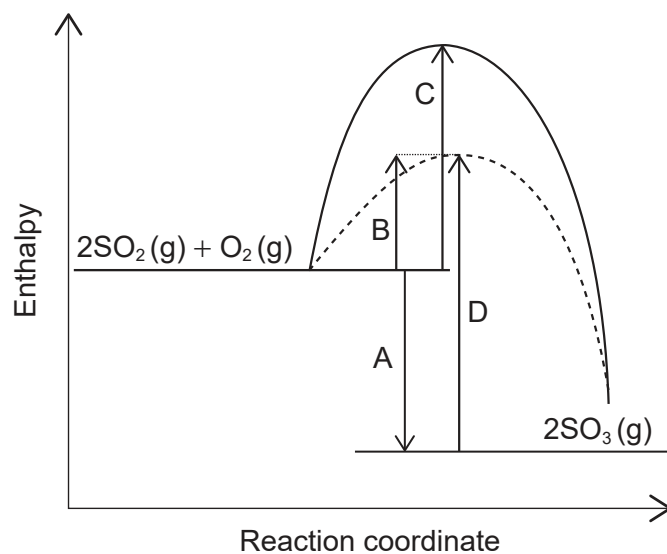
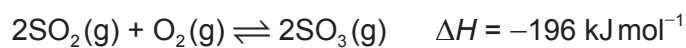
- A. $x - y + 4z$
- B. $\frac{1}{2}(x - y + 4z)$
- C. $x - y + 2z$
- D. $\frac{1}{2}(x - y + 2z)$
16. Which apparatus can be used to monitor the rate of this reaction?



- I. A pH meter
- II. A gas syringe
- III. A colorimeter
- A. I and II only
- B. I and III only
- C. II and III only
- D. I, II and III

Turn over

17. Which arrow shows the activation energy of the uncatalysed forward reaction for this equilibrium?



18. What is correct when temperature increases in this reaction at equilibrium?



| | Position of equilibrium | Equilibrium constant, K_c |
|----|-------------------------|-----------------------------|
| A. | Shifts left | Unchanged |
| B. | Shifts left | Decreases |
| C. | Shifts right | Unchanged |
| D. | Shifts right | Increases |

19. Which substance will **not** produce copper(II) chloride when added to dilute hydrochloric acid?

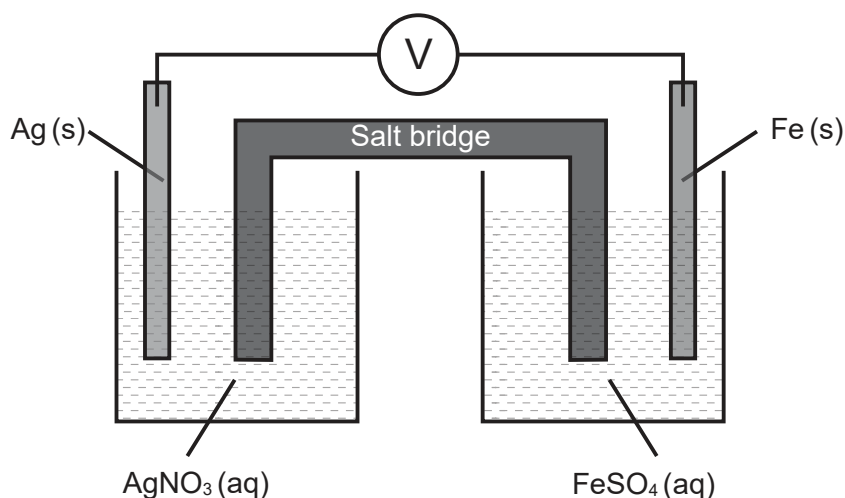
- A. $\text{Cu}(\text{s})$
- B. $\text{Cu}(\text{OH})_2(\text{s})$
- C. $\text{CuCO}_3(\text{s})$
- D. $\text{CuO}(\text{s})$

20. Which of these acids has the weakest conjugate base?

- A. HCl
- B. CH₃COOH
- C. NH₄Cl
- D. C₆H₅COOH

21. Iron is a stronger reducing agent than silver.

What is correct when this voltaic cell is in operation?



| | Anode (negative electrode) | Cathode (positive electrode) | Direction of electron flow in wire |
|----|---------------------------------------|---|---|
| A. | Ag | Fe | right to left |
| B. | Ag | Fe | left to right |
| C. | Fe | Ag | left to right |
| D. | Fe | Ag | right to left |

22. What is correct in an electrolytic cell?

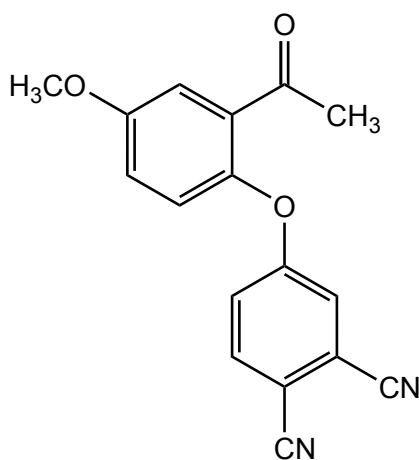
| | Electrode | Process at this electrode | Electrons lost or gained at this electrode |
|----|--------------------|----------------------------------|---|
| A. | Anode (positive) | Oxidation | Gained |
| B. | Anode (positive) | Reduction | Lost |
| C. | Cathode (negative) | Oxidation | Lost |
| D. | Cathode (negative) | Reduction | Gained |

Turn over

23. What are the oxidation states of oxygen?

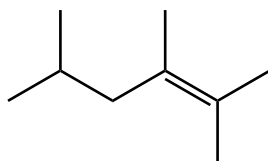
| | O_2 | OF_2 | H_2O_2 |
|----|-------|--------|----------|
| A. | -2 | -2 | -2 |
| B. | 0 | -2 | -1 |
| C. | 0 | +2 | -1 |
| D. | -2 | +2 | -2 |

24. Which functional groups are present in this molecule?



- A. carbonyl, ether, nitrile
- B. carbonyl, ester, nitrile
- C. carboxyl, ether, amine
- D. carboxyl, ester, amine
25. Which molecule will decolorize bromine water in the dark?
- A. cyclohexane
- B. hexane
- C. hex-1-ene
- D. hexan-1-ol

26. What is the IUPAC name of this molecule?



- A. 1,1,2,4-tetramethylpent-1-ene
 - B. 2,4,5-trimethylhex-4-ene
 - C. 2,4,5,5-tetramethylpent-4-ene
 - D. 2,3,5-trimethylhex-2-ene
27. Which mechanism does benzene most readily undergo?
- A. Nucleophilic substitution
 - B. Electrophilic substitution
 - C. Electrophilic addition
 - D. Free radical substitution
28. A student obtained the following data to calculate q , using $q = mc\Delta T$.

$$m = 20.0\text{g} \pm 0.2\text{g}$$

$$\Delta T = 10^\circ\text{C} \pm 1^\circ\text{C}$$

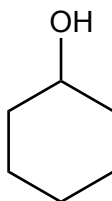
$$c = 4.18\text{J g}^{-1}\text{K}^{-1}$$

What is the percentage uncertainty in the calculated value of q ?

- A. 0.2
- B. 1.2
- C. 11
- D. 14

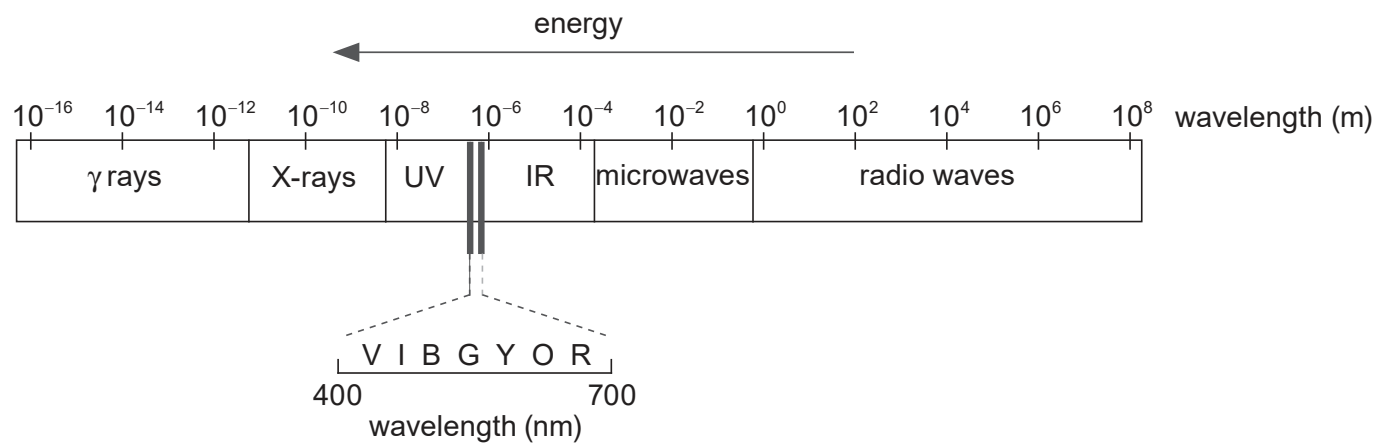
Turn over

29. What is the index of hydrogen deficiency (IHD) in cyclohexanol?



- A. 0
- B. 1
- C. 2
- D. 3

30. Which region of the electromagnetic spectrum is used to identify hydrogen environments in a molecule?



- A. X-ray
- B. UV
- C. IR
- D. radio waves